

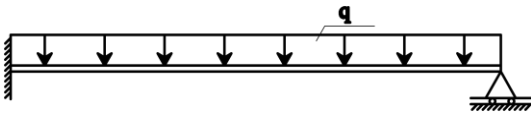
YAPI STATİĞİ II

YAPISAL ELEMAN DAVRANIŞLARI ÖDEVİ (1)

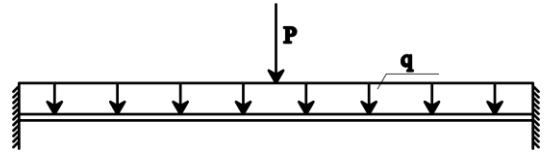
6 Mart 2009

Aşağıdaki sistemlerin elastik eğrilerini yapı statığı kabullerine göre şematik olarak çizin.

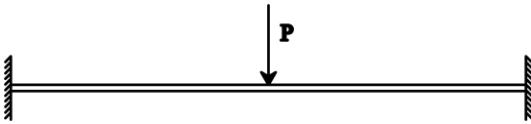
1.



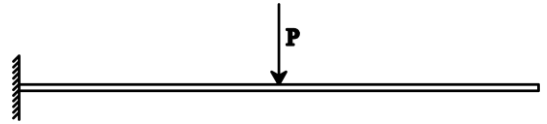
2.



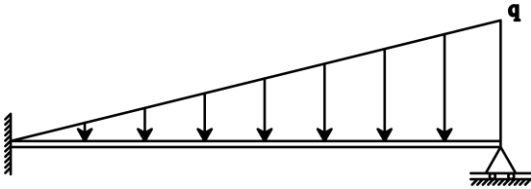
3.



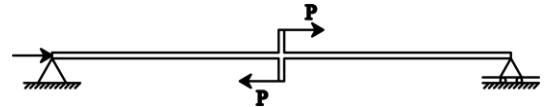
4.



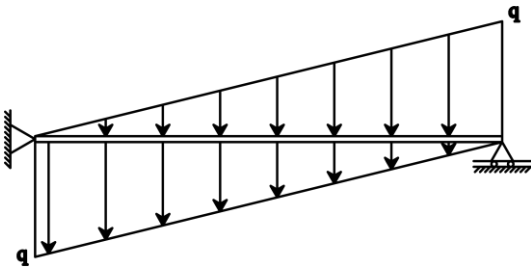
5.



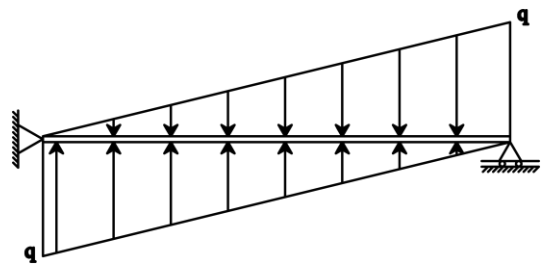
6.



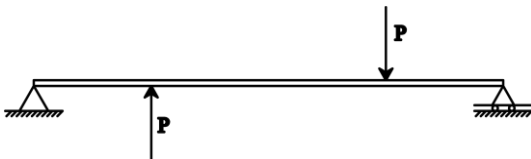
7.



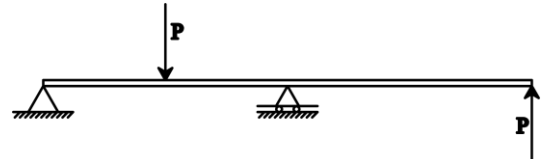
8.



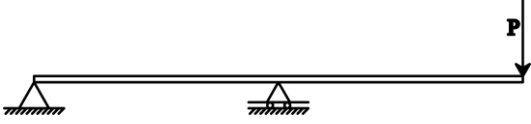
9.



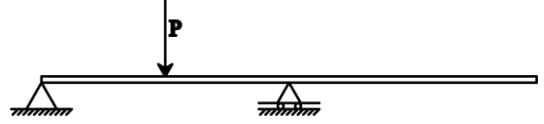
10.



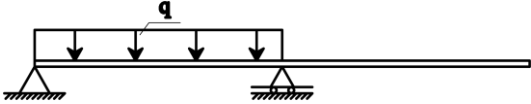
11.



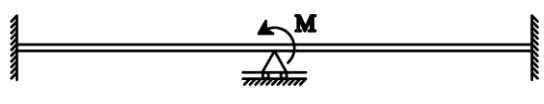
12.



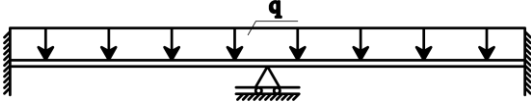
13.



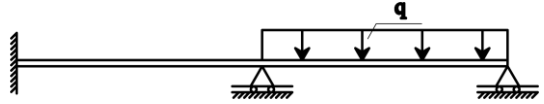
14.



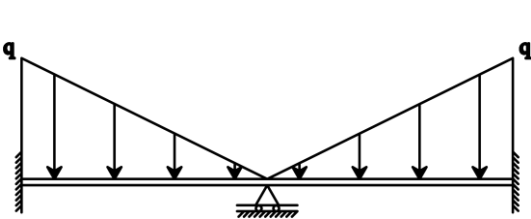
15.



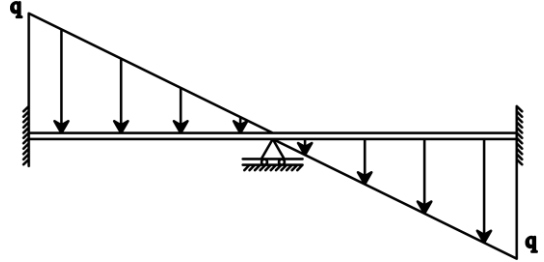
16.



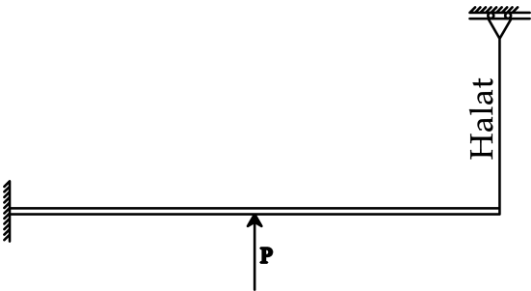
17.



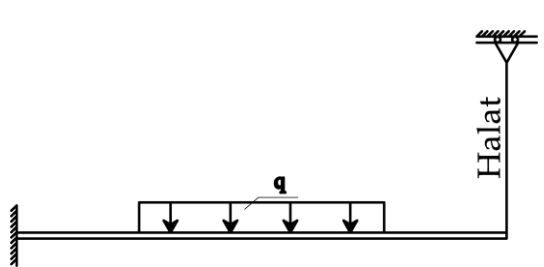
18.



19.



20.



- Çözümleri yukarıdaki şekiller üzerinde çizebilirsiniz.
- Bilgisayarla yapılan çizimler kabul edilmeyecektir.
- Çözümlerde dik açı olan köşeleri ve düz olan çizgileri belirtiniz
- Ödevlerin son teslim tarihi 12 Mart 2009 Perşembe günüdür.
- Sorular 5'er puandır.
- Son teslim tarihinden sonra teslim edilen ödevlerde her gün için 5 puan kırılacaktır.